

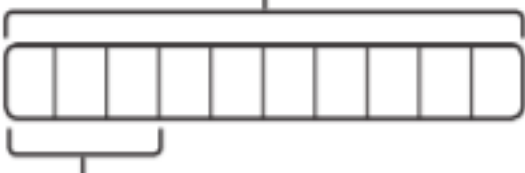
# Percentage of 4

1 Calculate these percentages.

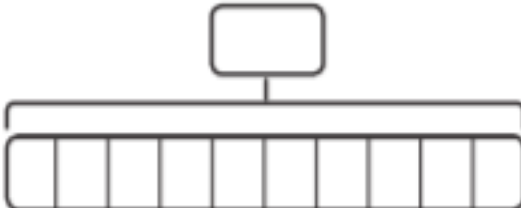
a) 30% of £400 = £

$400 \div 10 =$

$\times 3 =$



b) 60% of 400 g =  g



c) 90% of 500 m =  m



d) 75% of £60 = £

Whole is



2 Toshi plants 240 tulip bulbs. 10% are red tulips and 5% are yellow. The rest are pink. How many of each colour are there?



There are  red tulips.

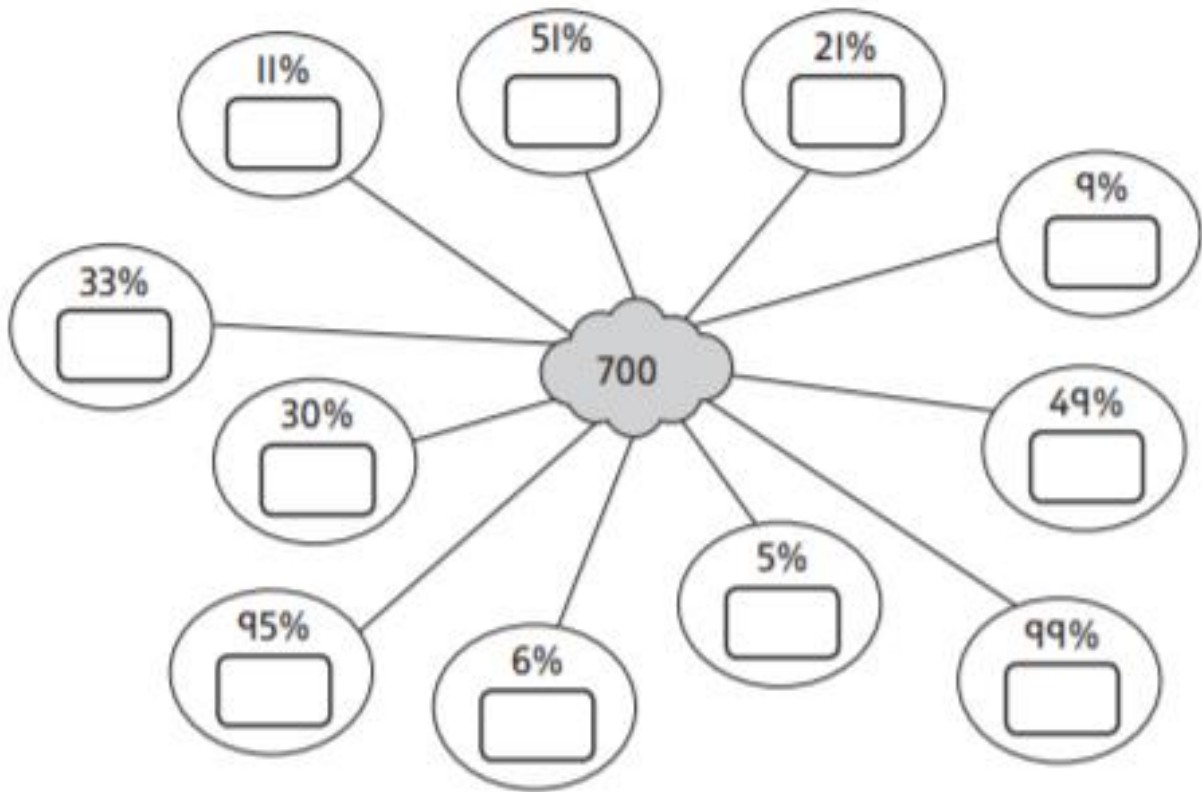
There are  yellow tulips.

There are  pink tulips.

3 a) Complete these percentages.

50% of 700 =     10% of 700 =     1% of 700 =

b) Now find these percentages of 700.



4 32,500 people signed up to run a marathon.

11% dropped out before race day. 29% did not complete the course.

How many people finished the marathon?



people finished the marathon.